

Math 130 Precalculus Spring 10 Midterm 3a

Name: Solutions

- You may use a graphing calculator.
- You may use a  $3 \times 5$  index card of notes.

1	10	
2	15	
3	10	
4	15	
5	10	
6	15	
7	15	
	90	

Midterm 3	
Overall	

(1) (10 points) Prove the following identity:

$$\frac{1}{\tan \theta + \cot \theta} = \sin \theta \cos \theta$$

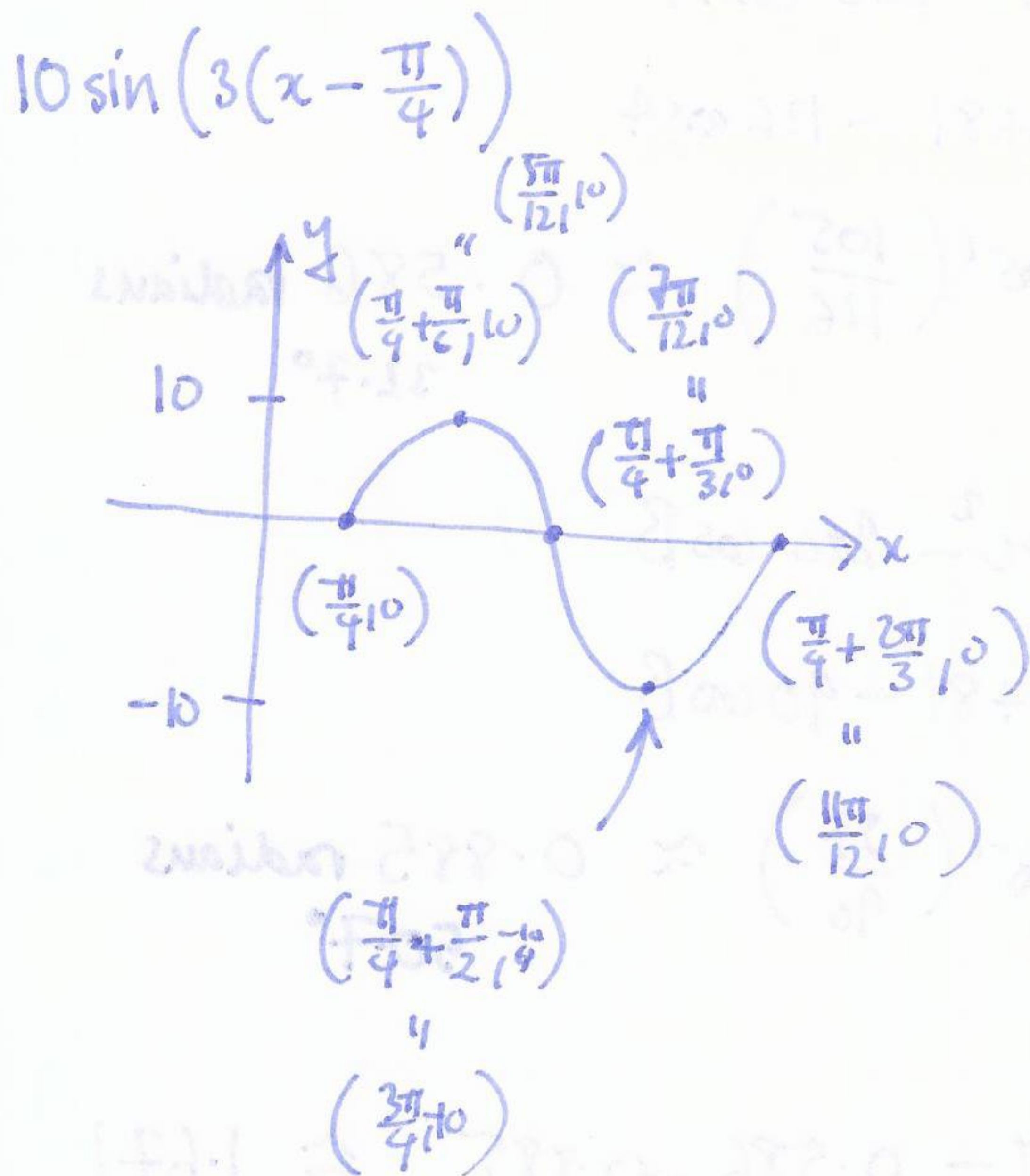
$$\frac{1}{\frac{\sin \theta}{\cos \theta} + \frac{\cos \theta}{\sin \theta}} = \frac{1}{\frac{\sin^2 \theta + \cos^2 \theta}{\sin \theta \cos \theta}} = \frac{1}{\frac{1}{\sin \theta \cos \theta}} = \sin \theta \cos \theta$$

\* You may use a graphing calculator.  
\* You may use a 30-60-90 degree triangle.

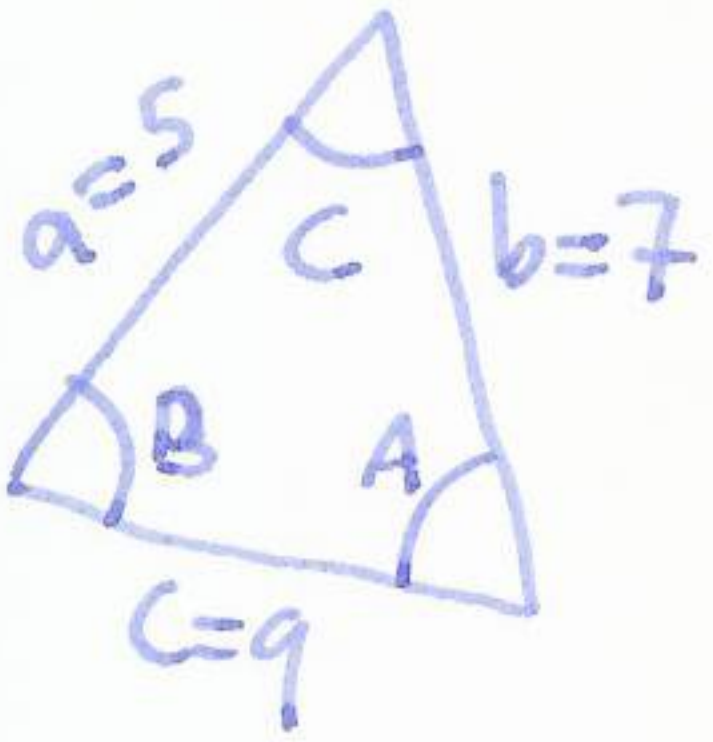
1	01
2	01
3	01
4	01
5	01
6	01
7	01
8	01
9	01
10	01

8	01
9	01

- (2) (15 points) Sketch one period of the graph  $y = 10 \sin\left(3x - \frac{3\pi}{4}\right)$ . Label the lowest points, the highest points and the x-intercepts of the graph with their coordinates.



(3) (10 points) Solve the following triangle:  $a = 5\text{cm}$ ,  $b = 7\text{cm}$ ,  $c = 9\text{cm}$ .



$$a^2 = b^2 + c^2 - 2bc \cos A$$

$$25 = 49 + 81 - 126 \cos A$$

$$A = \cos^{-1}\left(\frac{105}{126}\right) \approx 0.586 \text{ radians}$$

$$32.7^\circ$$

$$b^2 = a^2 + c^2 - 2ac \cos B$$

$$49 = 25 + 81 - 90 \cos B$$

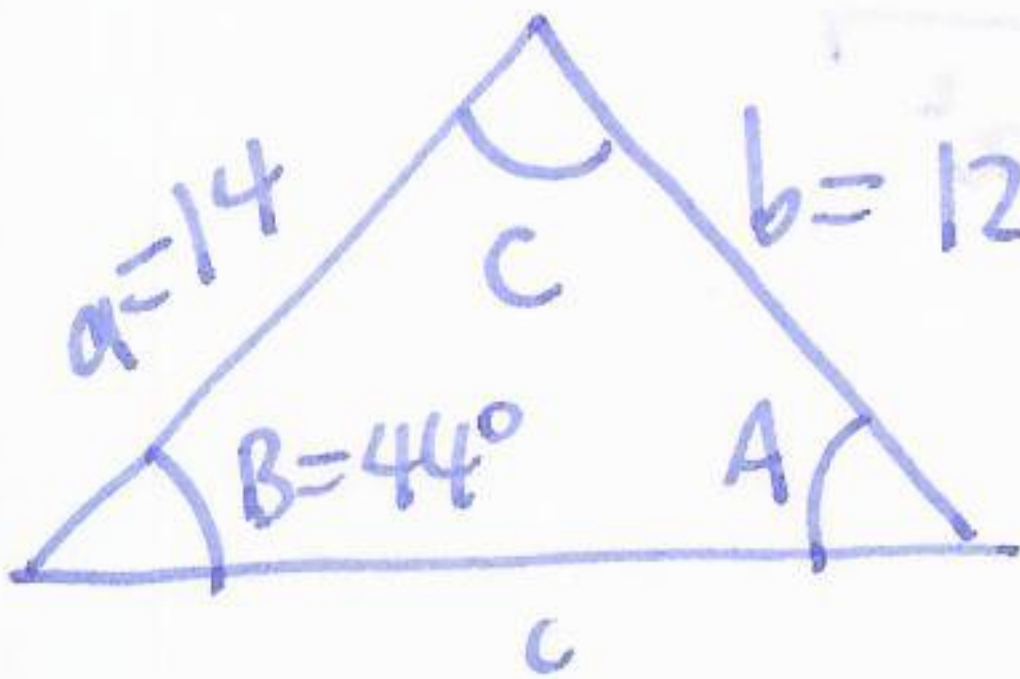
$$B = \cos^{-1}\left(\frac{57}{90}\right) \approx 0.885 \text{ radians}$$

$$50.7^\circ$$

$$C = \pi - 0.586 - 0.885 \approx 1.671$$

$$96.6^\circ$$

- (4) (15 points) Find all triangles with the following properties:  $a = 14\text{cm}$ ,  $b = 12\text{cm}$ ,  $B = 44^\circ$ .




$$\frac{a}{\sin A} = \frac{b}{\sin B}$$

$$\sin A = \frac{14 \sin 44^\circ}{12}$$

$$\approx 0.810$$

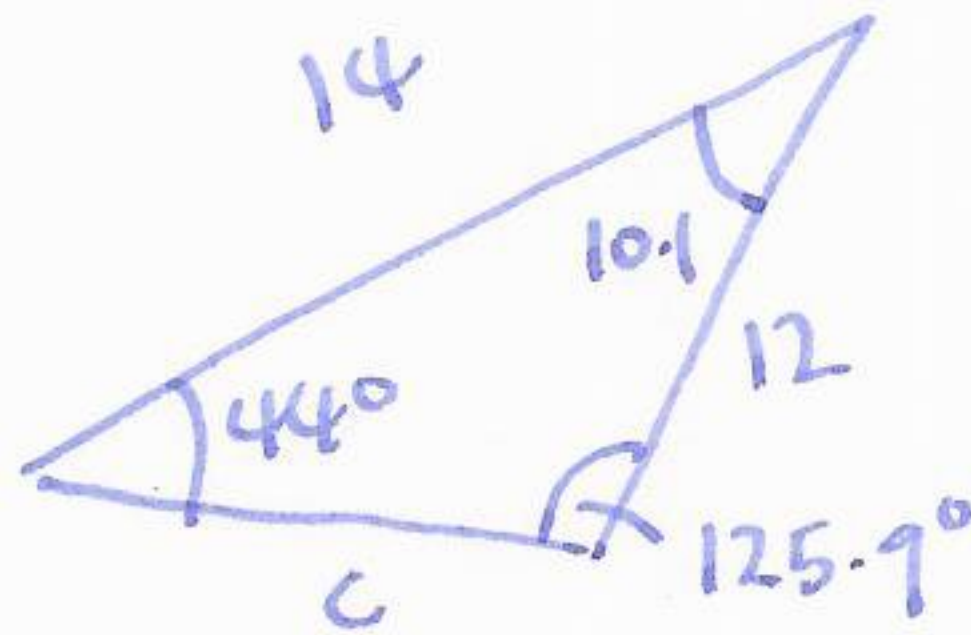
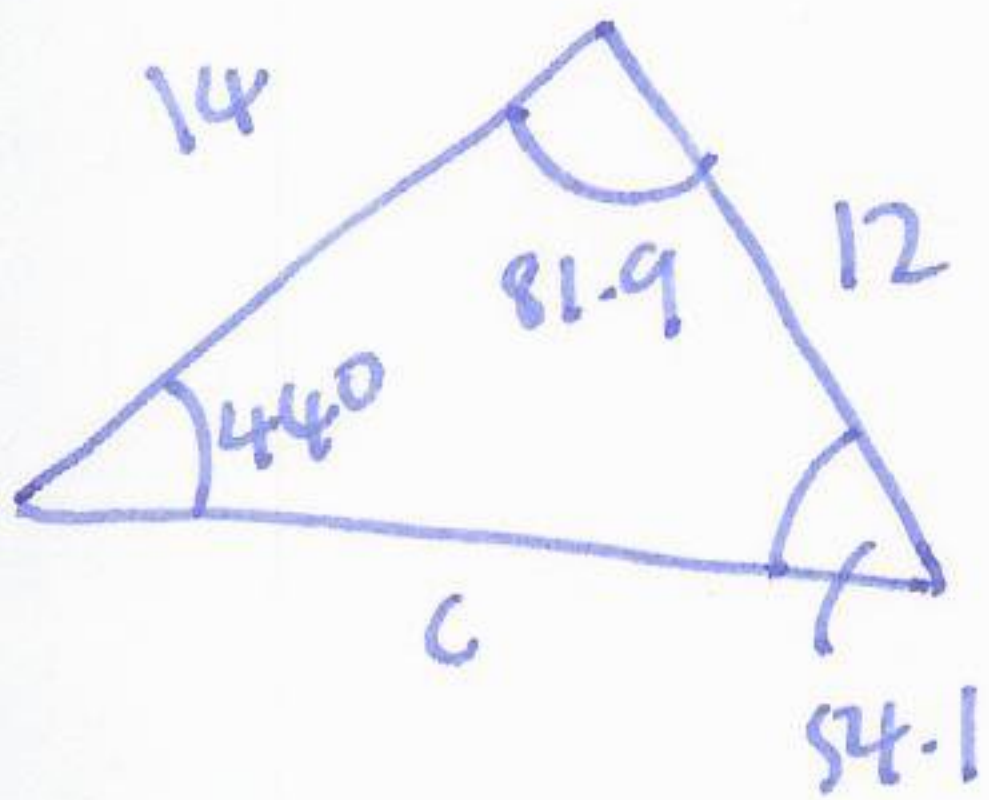
$$A \approx 0.945 \approx 54.1^\circ$$



two solutions  $A \approx 0.945 \approx 54.1^\circ$

$$A \approx \pi - 0.945$$

$$\approx 180 - 54.1^\circ = 125.9^\circ$$



$$\frac{c}{\sin 81.9^\circ} = \frac{12}{\sin 44^\circ}$$

$$c = 12 \cdot \frac{\sin 81.9^\circ}{\sin 44^\circ}$$

$$c \approx 17.1$$

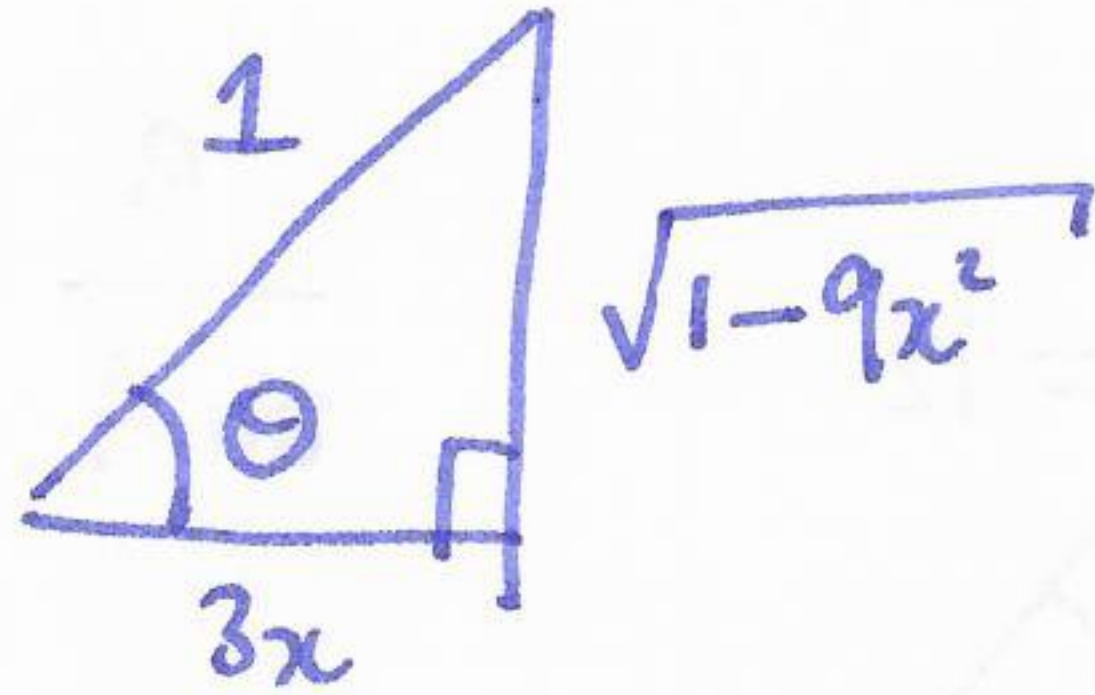
$$\frac{c}{\sin 10.1^\circ} = \frac{12}{\sin 44^\circ}$$

$$c = \frac{12 \sin 10.1^\circ}{\sin 44^\circ}$$

$$c \approx 3.03$$

(5) (10 points) Simplify  $\tan(\cos^{-1}(3x))$ .

$$\tan \theta \quad \cos \theta = 3x$$



$$\tan \theta = \frac{\sqrt{1-9x^2}}{3x}$$



(6) (15 points) Find all solutions that are in  $[0, 2\pi)$  of the equation

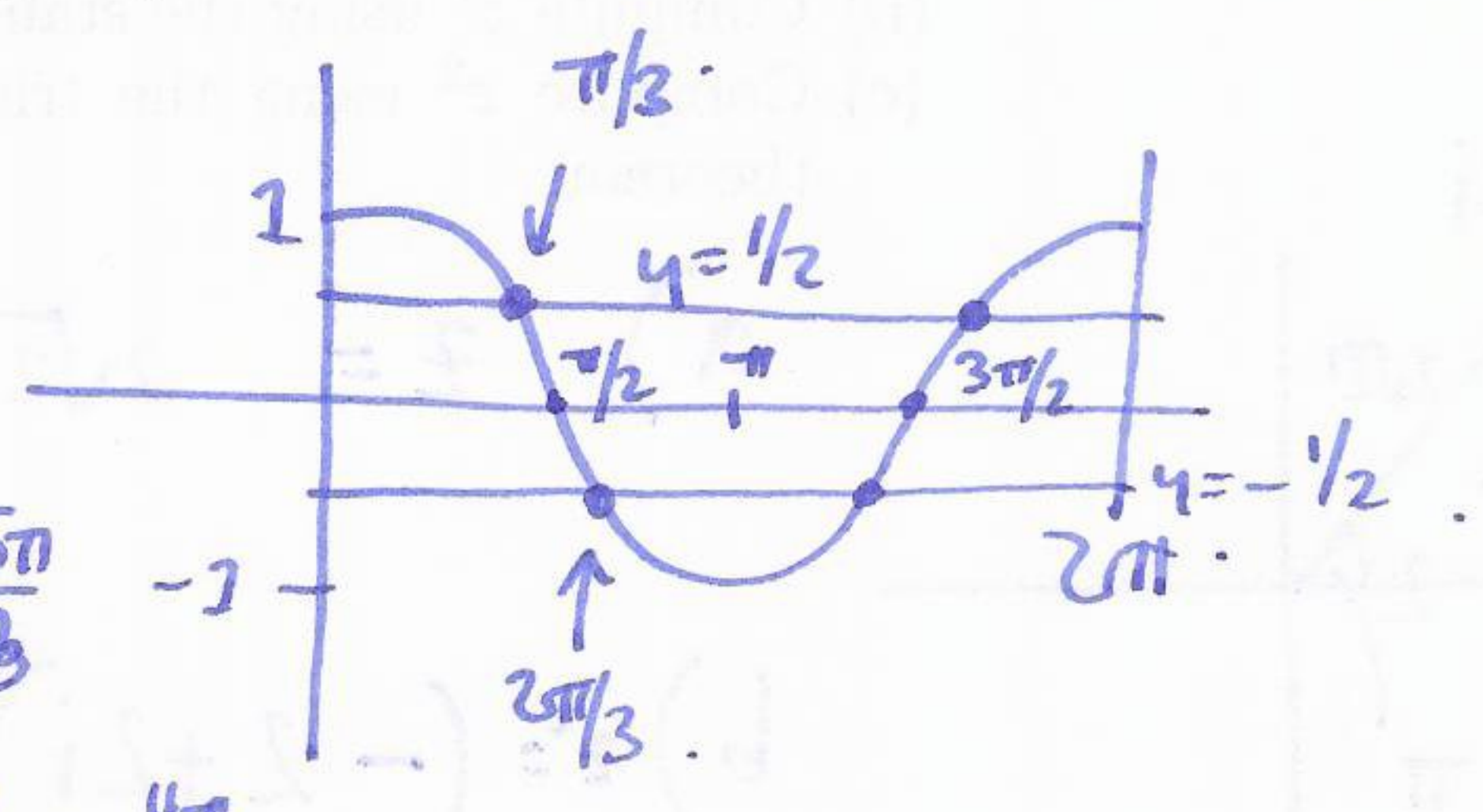
$$4 \cos^2 x - 1 = 0$$

$$\cos^2 x = \frac{1}{4} \quad \cos x = \pm \frac{1}{2}$$

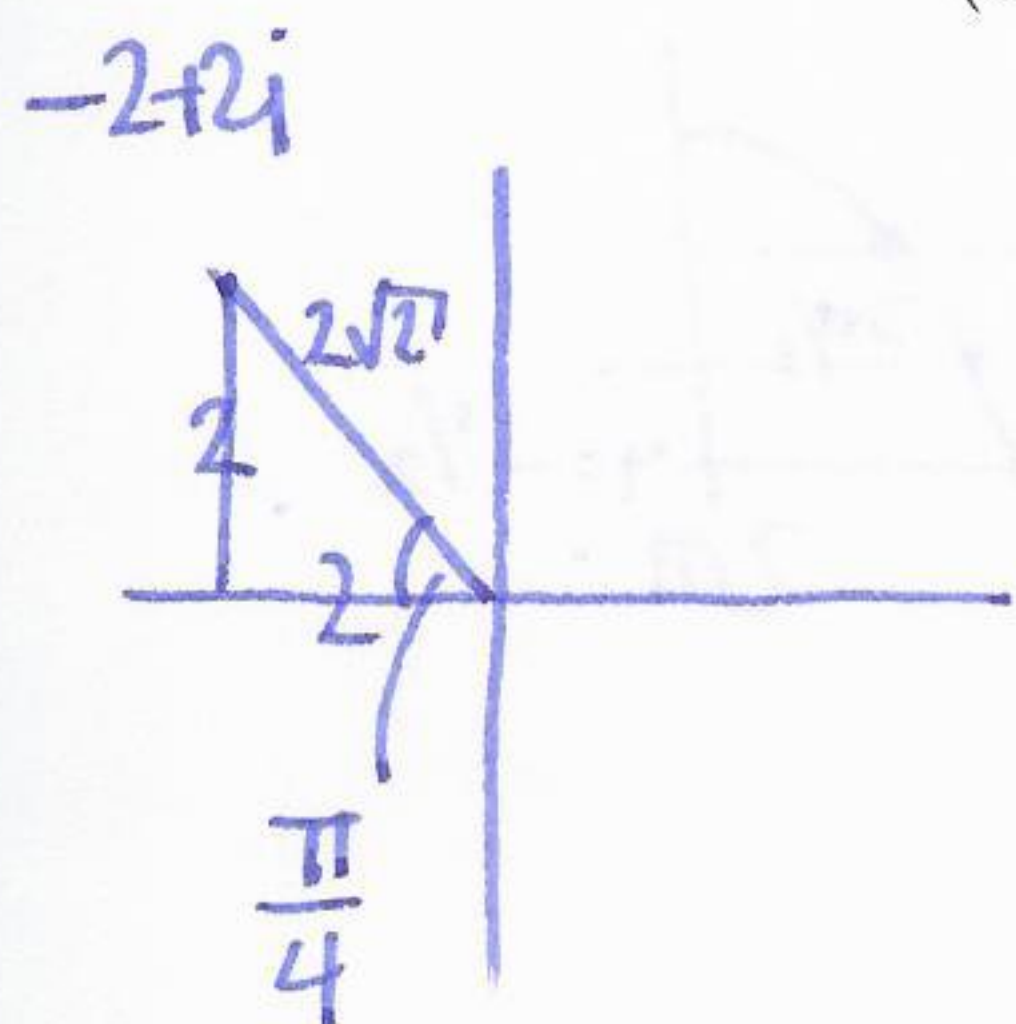
$$\cos^{-1}\left(\frac{1}{2}\right) = \frac{\pi}{3} \quad \text{other solution } 2\pi - \frac{\pi}{3} = \frac{5\pi}{3}$$

$$\cos^{-1}\left(-\frac{1}{2}\right) = \frac{2\pi}{3} \quad \text{other solution } 2\pi - \frac{2\pi}{3} = \frac{4\pi}{3}$$

solutions :  $\frac{\pi}{3}, \frac{2\pi}{3}, \frac{4\pi}{3}, \frac{5\pi}{3}$



- (7) (15 points) Consider the complex number  $z = -2 + 2i$ .
- Write  $z$  in trigonometric form as  $z = r(\cos(\phi) + i \sin(\phi))$ .
  - Compute  $z^2$  using the standard  $a + bi$  form.
  - Compute  $z^2$  using the trigonometric form, i.e. by using De Moivre's theorem.



$$a) z = 2\sqrt{2} \left( \cos \frac{3\pi}{4} + i \sin \frac{3\pi}{4} \right)$$

$$b) z^2 = (-2 + 2i)^2 = 4 - 8i + 4i^2$$

$$= 4 - 4 - 8i = -8i$$

$$c) z^2 = (2\sqrt{2})^2 \left( \cos \frac{3\pi}{2} + i \sin \frac{3\pi}{2} \right)$$

$$= 8 \left( \cos \frac{3\pi}{2} + i \sin \frac{3\pi}{2} \right) = -8i$$