

Math 130 Precalculus Spring 10 Midterm 2a

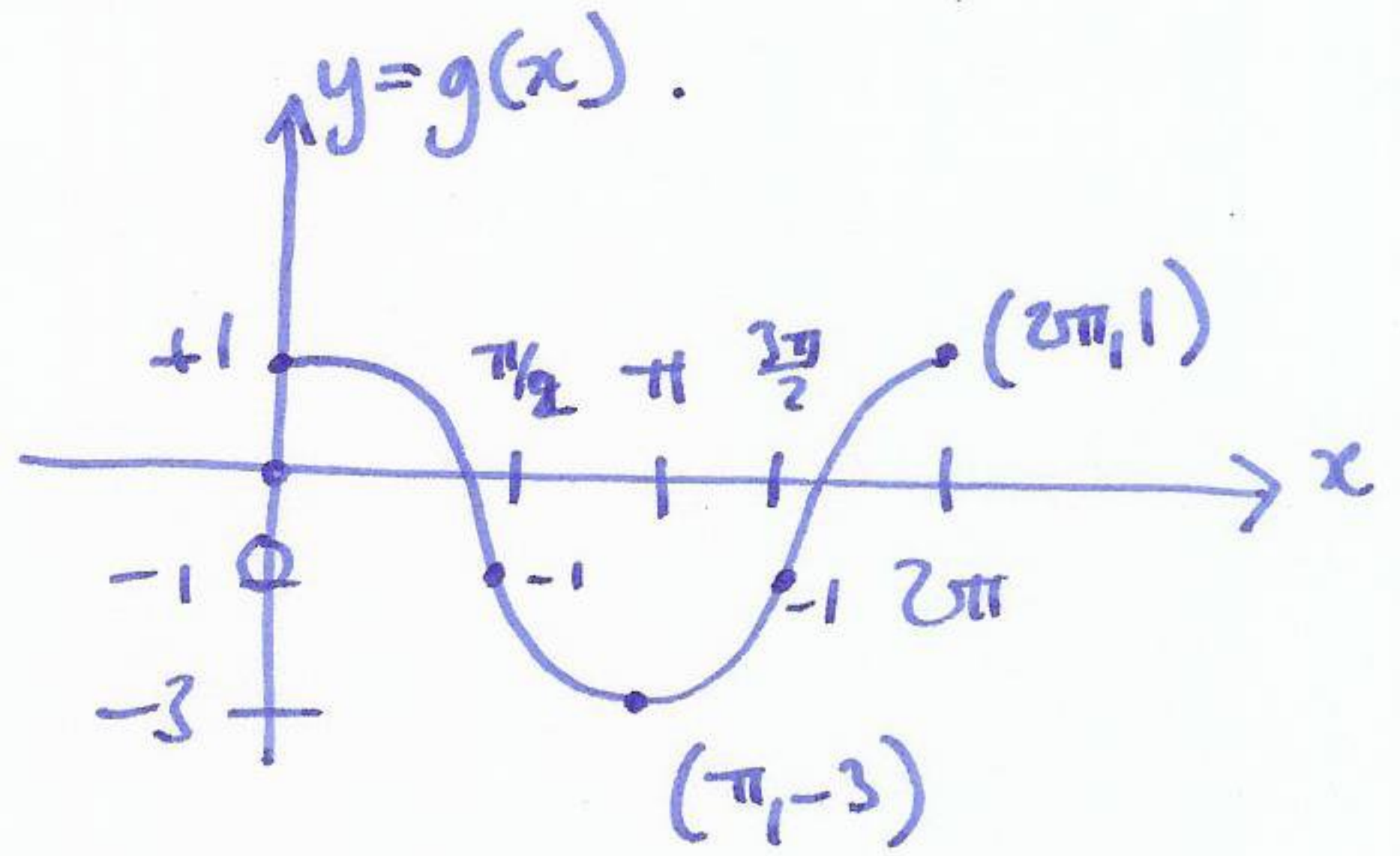
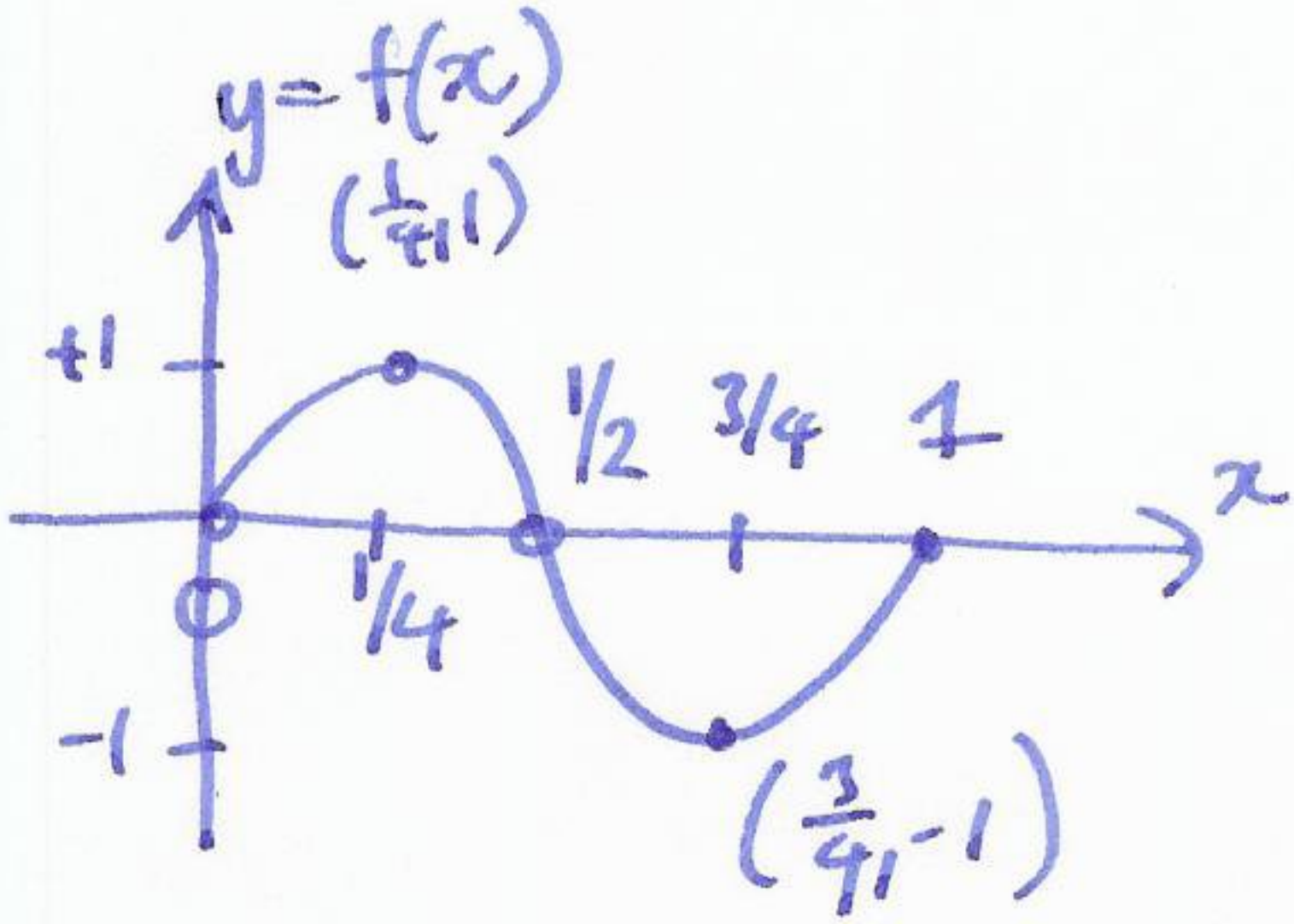
Name: Solutions

- You may use a graphing calculator.
- You may use a 3 × 5 index card of notes.

1	15	
2	10	
3	15	
4	10	
5	10	
6	15	
7	10	
8	15	
	100	

(1) (10 points) Sketch one period of the graphs of the following functions.

$$f(x) = \sin(2\pi x), \quad g(x) = 2\cos(x) - 1$$

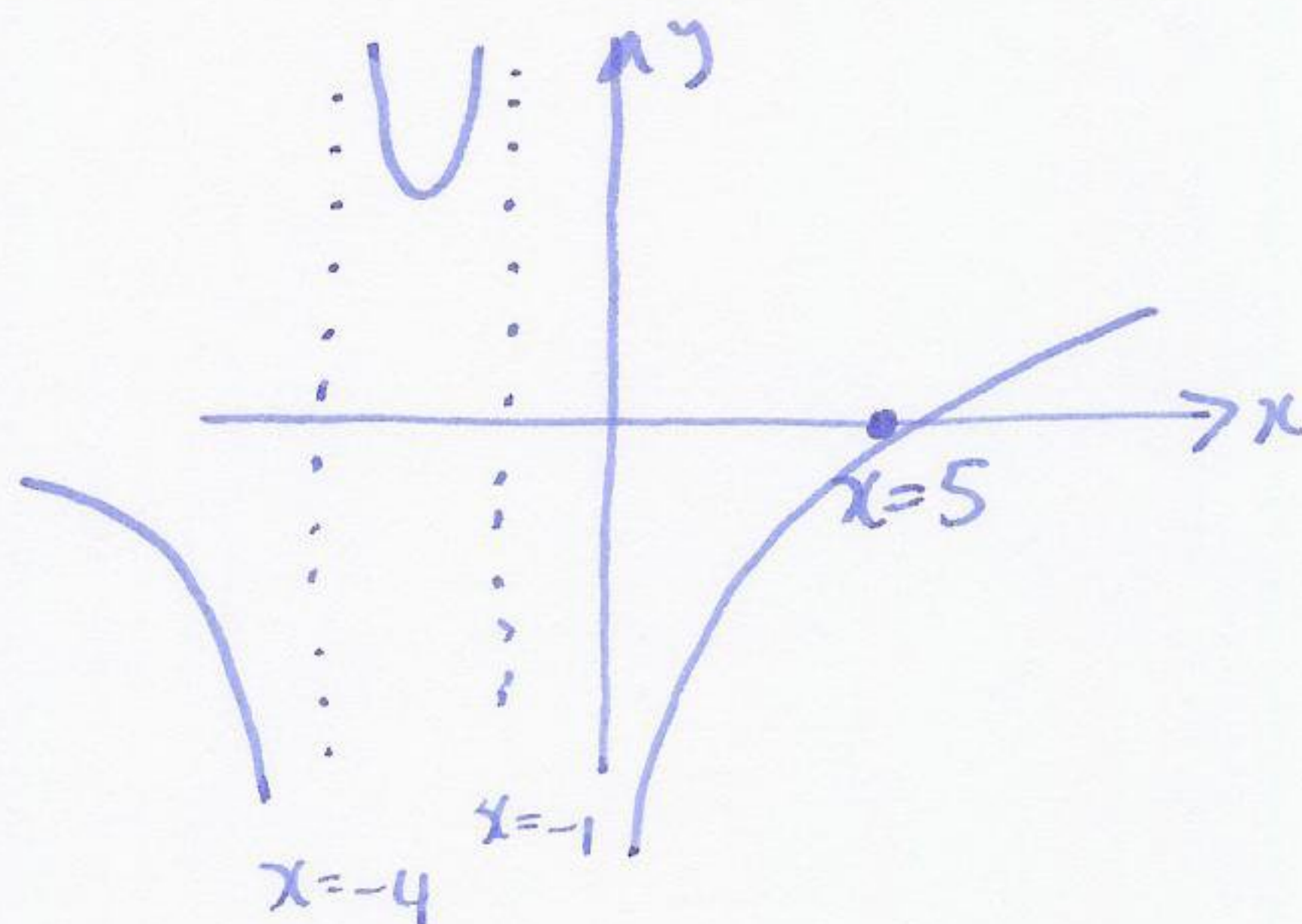


- (2) (15 points) Solve the inequality  $\frac{x-2}{x+4} \leq \frac{x-3}{x+1}$ . Write your answer in interval notation.

$$\frac{x-3}{x+1} - \frac{x-2}{x+4} \geq 0 \quad \frac{(x-3)(x+4) - (x-2)(x+1)}{(x+1)(x+4)} \geq 0$$

$$\frac{x^2 + x - 12 - x^2 + x + 2}{(x+1)(x+4)} \geq 0 \quad \frac{2x - 10}{(x+1)(x+4)} \geq 0$$

$$\frac{2(x-5)}{(x+1)(x+4)} \geq 0$$

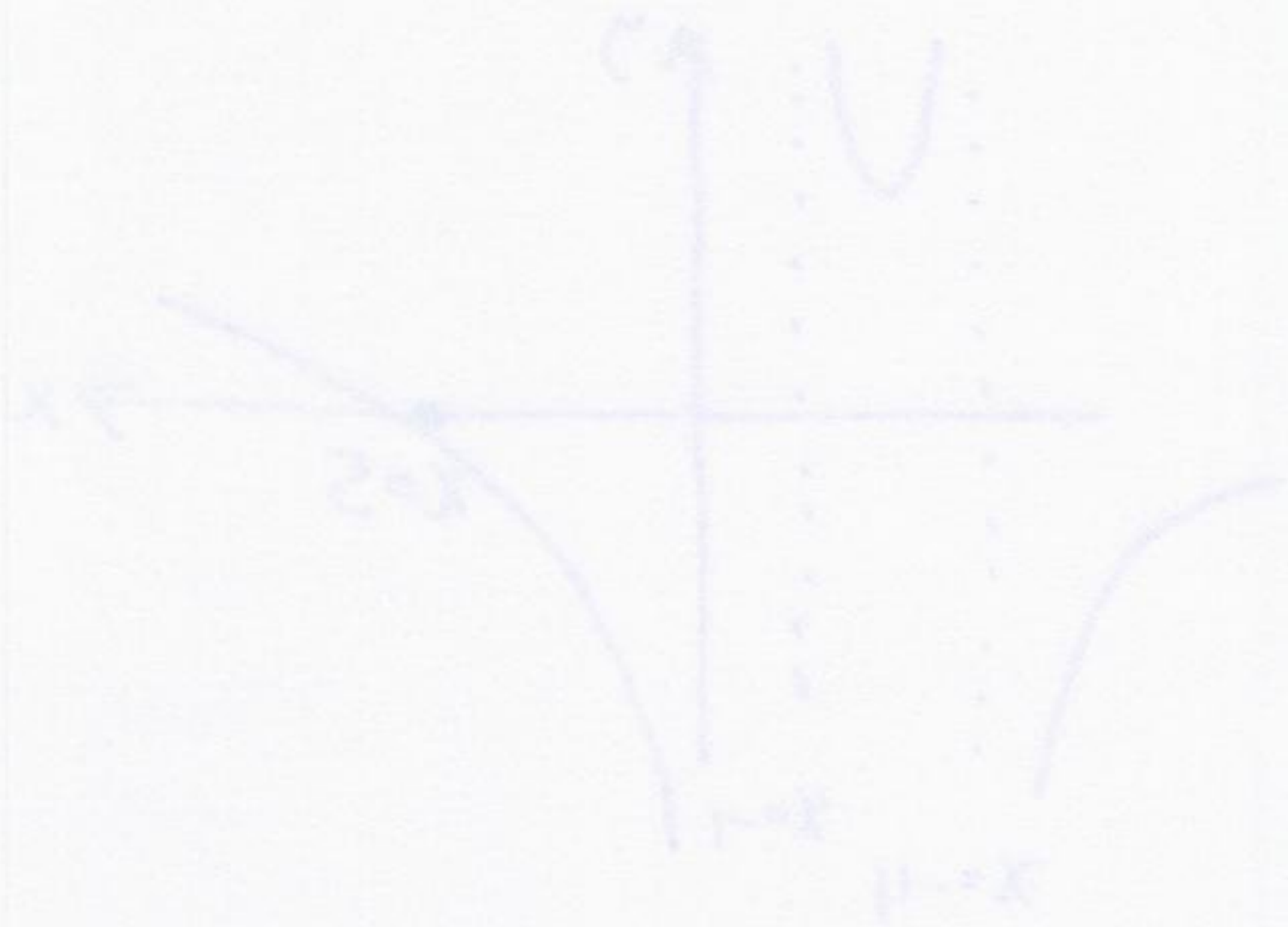


$x \geq 5$	+ / + +	+
$-1 < x \leq 5$	- / + +	-
$-4 < x < -1$	- / - +	+
$x < -4$	- / - -	-

$$(-4, -1) \cup [5, \infty)$$

- (3) (10 points) Let  $f(x) = 2x^2 - 3x - 2$  and  $g(x) = -3x - 1$ . Compute and simplify  $(f \circ g)(x)$ .

$$\begin{aligned}
 f(g(x)) &= 2(-3x-1)^2 - 3(-3x-1) - 2 \\
 &= 2(9x^2 + 6x + 1) + 9x + 3 - 2 \\
 &= 18x^2 + 21x + 3
 \end{aligned}$$



+	+	+	+
-	+	-	-
+	+	-	-
-	-	-	-

$$(-4, 2) \cup (2, 4)$$

(4) (10 points) If  $f(x) = \frac{3x}{5-x}$ , find and simplify  $f^{-1}(x) = ?$

$$y = \frac{3x}{5-x} \quad \text{swap } x, y : \quad x = \frac{3y}{5-y}$$

$$x(5-y) = 3y$$

$$5x - xy = 3y$$

$$5x = 3y + xy$$

$$5x = y(3+x)$$

$$y = \frac{5x}{3+x} \quad \text{so} \quad f^{-1}(x) = \frac{5x}{3+x}$$

(5) (10 points) Show the following identities:

(a)  $(\cos x + \sin x)(\cos x - \sin x) = \cos 2x$

(b)

$$\frac{2 \sin x}{\sin 2x} = \sec x$$

$$a) (\cos x + \sin x)(\cos x - \sin x) = \cos^2 x - \sin^2 x = \cos 2x$$

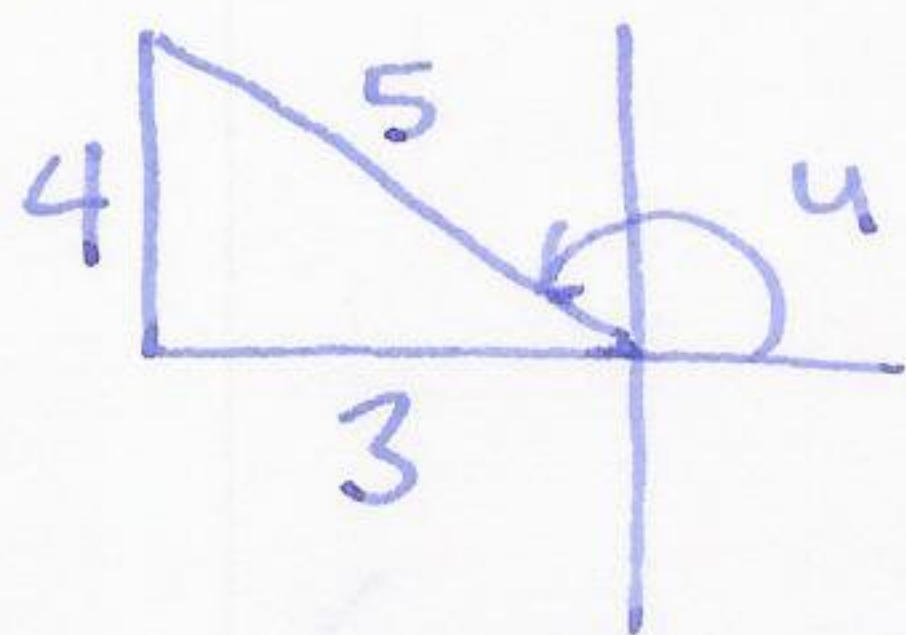
(double angle formula)

$$b) \frac{2 \sin x}{\sin 2x} = \frac{2 \sin x}{2 \sin x \cos x} = \frac{1}{\cos x} = \sec x$$

(double angle formula)

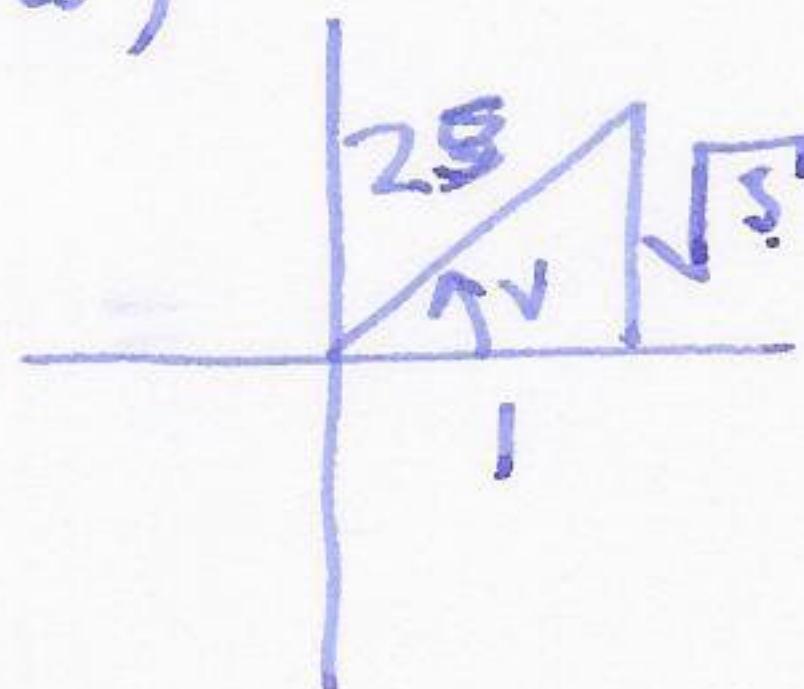
- (6) (15 points) If  $\cos(u) = -\frac{3}{5}$ , ( $u$  in quadrant II), and  $\sin(v) = \frac{1}{2}$ , ( $v$  in quadrant I), use properties of right angled triangles and suitable identities to find the values of the following: (a)  $\sin(u)$ , (b)  $\cos(v)$ , and (c)  $\sin(u+v)$ . Write all answers as fractions.

a)



$$\sin(u) = \frac{4}{5}$$

b)



$$\cos(v) = \frac{1}{2}$$

$$c) \quad \sin(u+v) = \sin(u)\cos(v) + \sin(v)\cos(u)$$

$$= \frac{4}{5} \cdot \frac{\sqrt{3}}{2} + \frac{1}{2} \cdot \left(-\frac{3}{5}\right) = \frac{4\sqrt{3}}{10} - \frac{3}{10}$$

$$= \frac{4\sqrt{3} - 3}{10}$$

(7) (10 points) Show the following identity:

$$\sin^3(x) = \sin(x) - \frac{1}{2} \sin(2x) \cos(x)$$

$$\sin(x) - \frac{1}{2} \sin(2x) \cos(x) = \sin x - \sin x \cos^2 x$$

(double angle)

$$= \sin x (1 - \cos^2 x)$$

$$= \sin x \sin^2 x \quad (\text{Pythagorean identity})$$

$$= \sin^3 x$$



(8) (25 points) Consider the function  $f(x) = 10 \sin(\frac{1}{2}x - \frac{\pi}{2})$ .

(a) What is the amplitude?

(b) What is the period?

(c) What is the phase shift?

(d) Draw a picture of the graph for one period, labelling the  $x$ -intercepts and the maximum and minimum.

$$f(x) = 10 \sin(\frac{1}{2}(x - \pi))$$

a) 10

b)  $\frac{2\pi}{1/2} = 4\pi$

c)  $\pi$

d)

